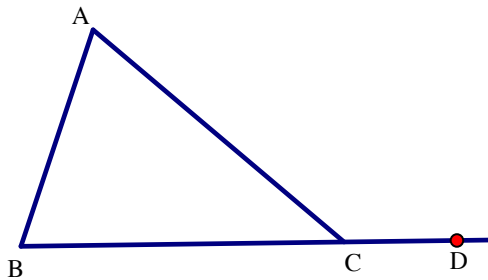


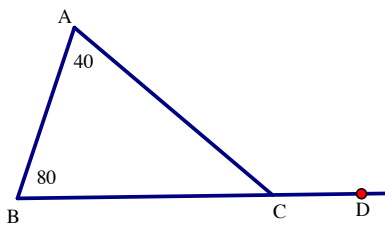
Exterior Angle of Triangle

The exterior angle of a triangle is equal to the sum of the 2 remote interior angles.

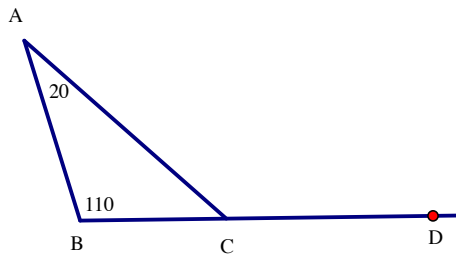


$$m\angle ACD = m\angle A + m\angle B$$

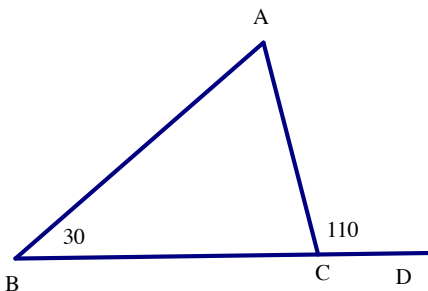
1. Find the $m\angle ACD$



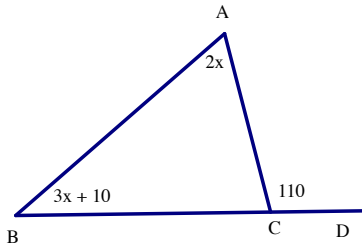
2. Find the $m\angle ACD$



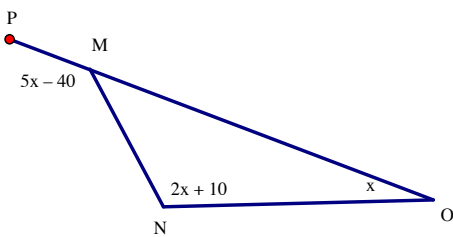
3. Find the $m\angle A$



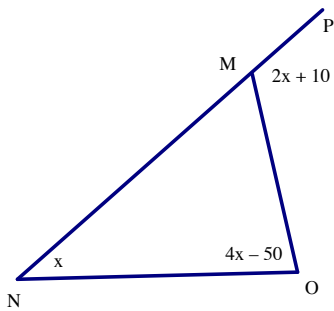
4. Find the $m\angle A$



5. Find the $m\angle PMN$



6. Find the measure of all the angles in the diagram below.



7. Find the measure of all the angles in the diagram below

