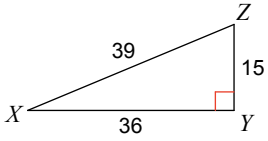


Trig Ratios

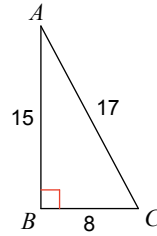
Use SOHCAHTOA

Find the value of each trigonometric ratio.

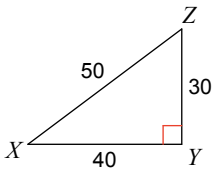
1)  $\cos X$



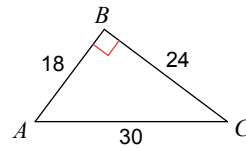
2)  $\sin A$



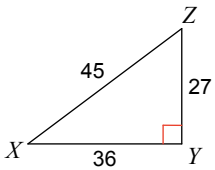
3)  $\cos X$



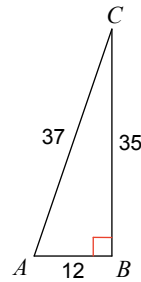
4)  $\cos C$



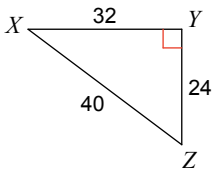
5)  $\cos X$



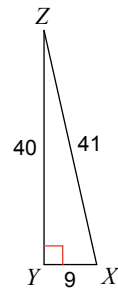
6)  $\tan A$



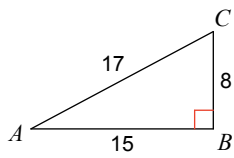
7)  $\tan Z$



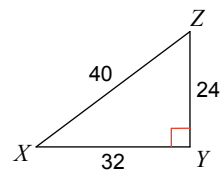
8)  $\sin Z$



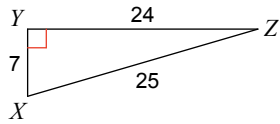
9)  $\tan C$



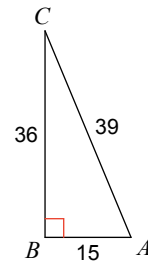
10)  $\cos X$



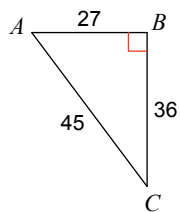
11)  $\tan X$



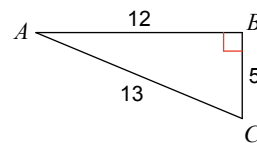
12)  $\tan C$



13)  $\sin A$



14)  $\cos A$



15)  $\cos A$

