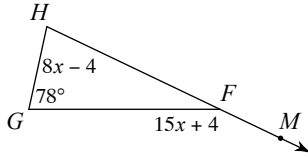
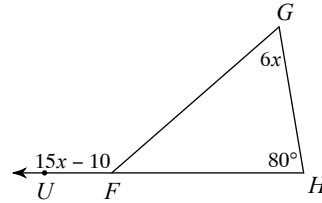


Find the measure of the angle indicated.

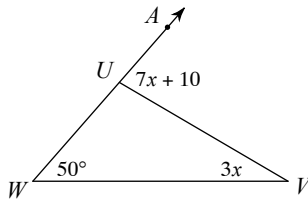
1) Find $m\angle H$.



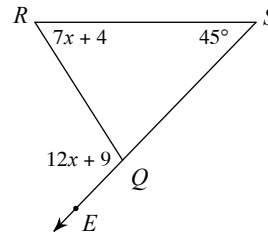
2) Find $m\angle G$.



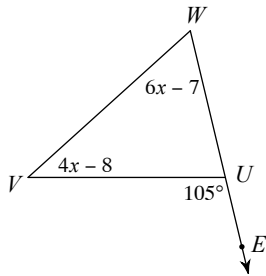
3) Find $m\angle V$.



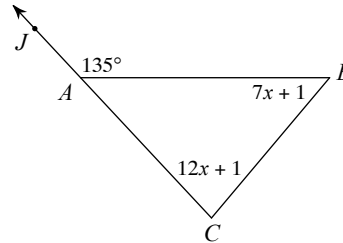
4) Find $m\angle EQR$.



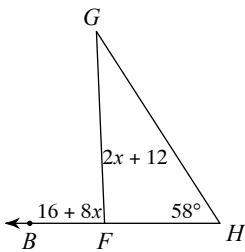
5) Find $m\angle V$.



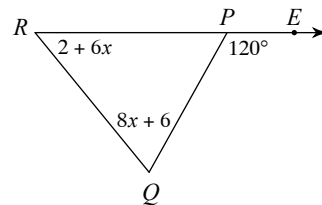
6) Find $m\angle B$.



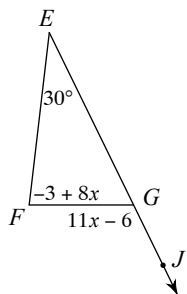
7) Find $m\angle G$.



8) Find $m\angle Q$.



9) Find $m\angle JGF$.



10) Find $m\angle V$.

