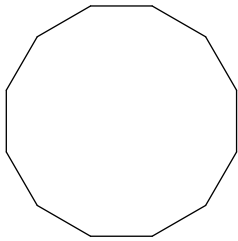


Int Angle Polygon

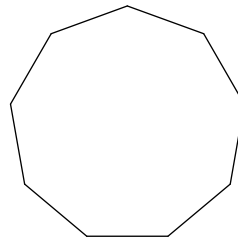
$$(n-2)180^\circ/n$$

Find the measure of one interior angle in each regular polygon. Round your answer to the nearest tenth if necessary.

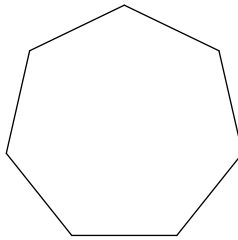
1)



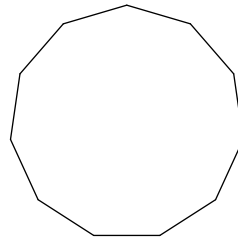
2)



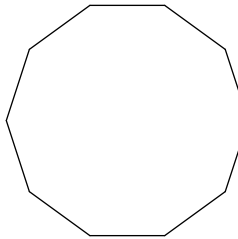
3)




4)



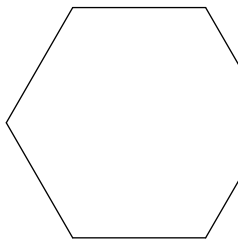
5)



6)



7)



8)

