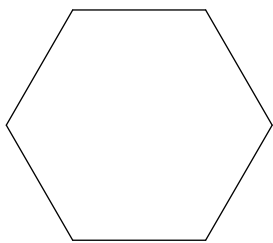


Sum Int. Angles Polygon

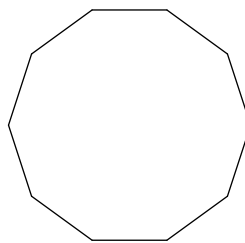
$$(n-2)180^\circ$$

**Find the interior angle sum for each polygon. Round your answer to the nearest tenth if necessary.**

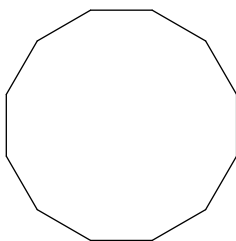
1)



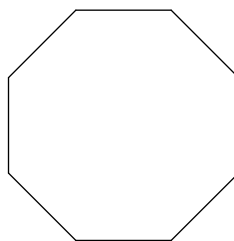
2)



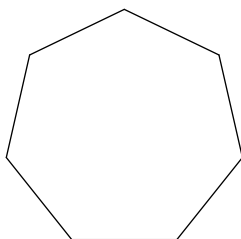
3)




4)



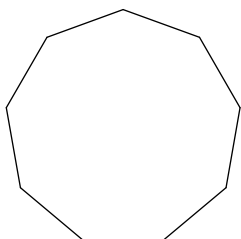
5)



6)



7)



8)

