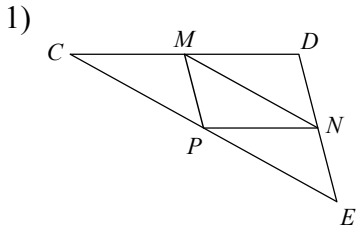
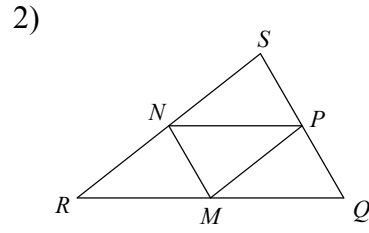


Midsegment of a Triangle

In each triangle, M, N, and P are the midpoints of the sides. Name a segment parallel to the one given.



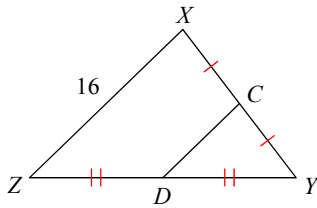
$\overline{CD} \parallel \underline{\hspace{1cm}}$



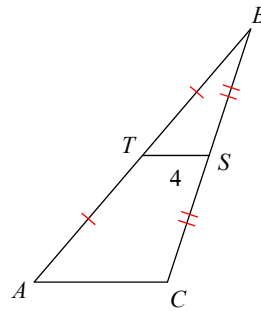
$\underline{\hspace{1cm}} \parallel \overline{QS}$

Find the missing length indicated.

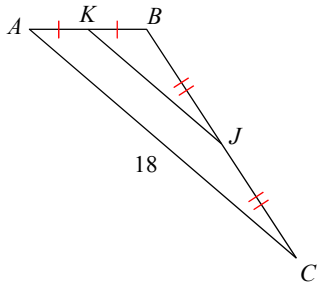
3) Find CD



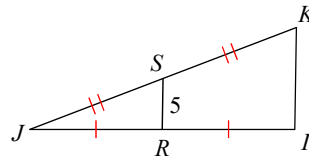
4) Find AC



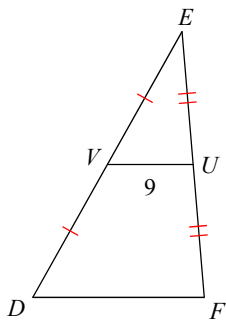
5) Find KJ



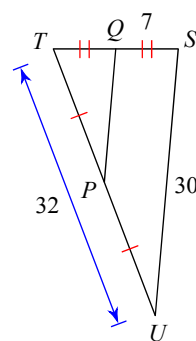
6) Find IK



7) Find DF

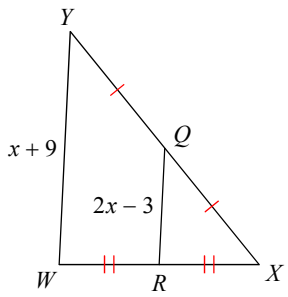


8) Find PQ

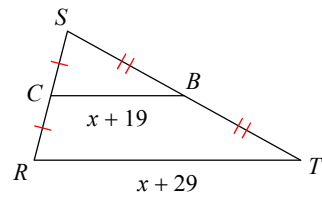


Solve for x .

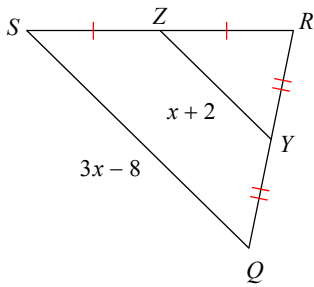
9)



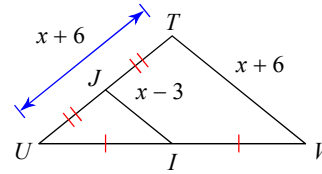
10)



11)

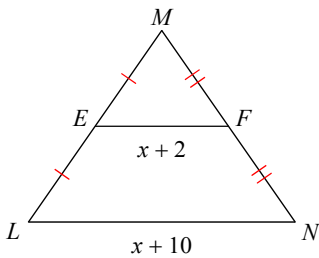


12)

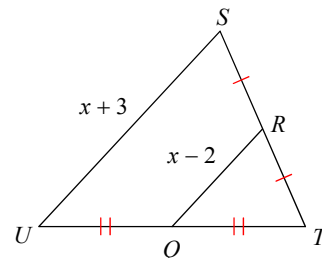


Find the missing length indicated.

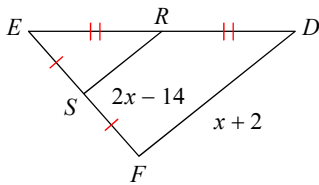
13) Find LN



14) Find RQ



15) Find SR



16) Find VW

