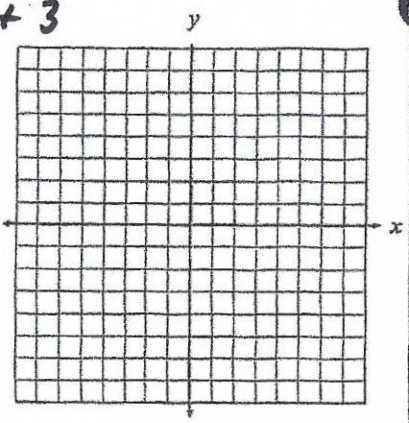


9

$$y = 2x + 3$$

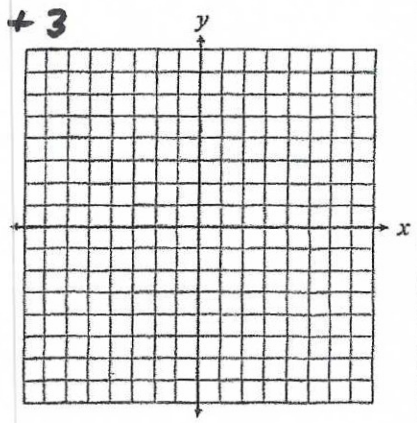
| x | y |
|---|---|
| | |
| | |
| | |
| | |
| | |



10

$$y = -2x + 3$$

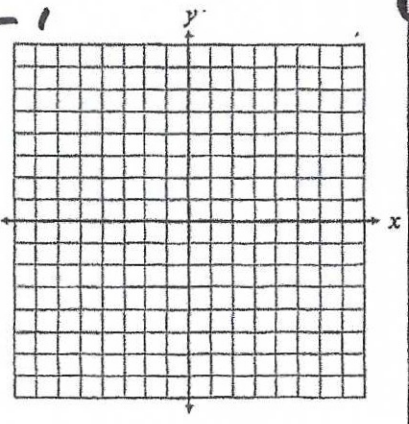
| x | y |
|---|---|
| | |
| | |
| | |
| | |
| | |



11

$$y = \frac{2}{3}x - 1$$

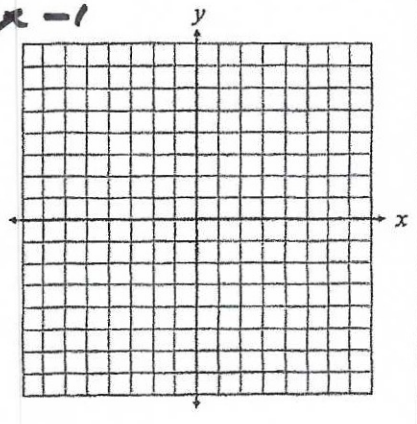
| x | y |
|---|---|
| | |
| | |
| | |
| | |
| | |



12

$$y = -\frac{2}{3}x - 1$$

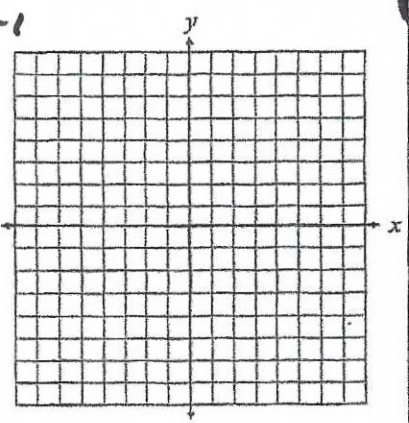
| x | y |
|---|---|
| | |
| | |
| | |
| | |
| | |



13

$$y = 3x + 1$$

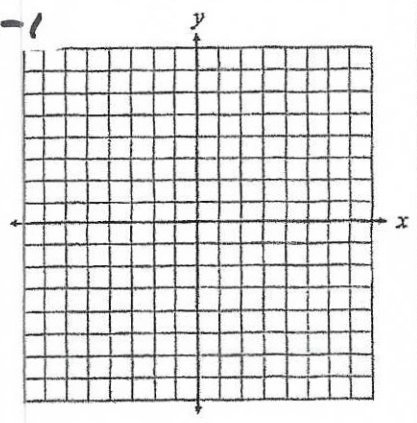
| x | y |
|---|---|
| | |
| | |
| | |
| | |
| | |



14

$$y = 3x - 1$$

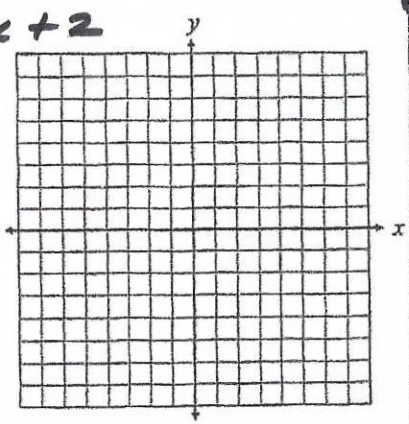
| x | y |
|---|---|
| | |
| | |
| | |
| | |
| | |



15

$$y = -\frac{3}{4}x + 2$$

| x | y |
|---|---|
| | |
| | |
| | |
| | |
| | |



16

$$y = \frac{2}{3}x - 3$$

| x | y |
|---|---|
| | |
| | |
| | |
| | |
| | |

